

केन्द्रीय विद्यालय धनपुरी

कक्षा 5 हिंदी ग्रीष्मावकाश गृहकार्य

नोट - परियोजना कार्य के 10 अंक मिलेंगे | सभी को करना अनिवार्य है।

प्रश्न1. प्रतिदिन 1 सुलेख लिखें।

प्रश्न2. "खिलौने वाला" कविता को कंठस्थ करिए।

प्रश्न3. 10-10 शब्द संज्ञा, सर्वनाम, विशेषण, क्रिया लिखिए।

प्रश्न4 कोरोना के समय में गर्मी की छुट्टियाँ आपने कैसे बिताई अपने शब्दों में लिखिए।

प्रश्न5. आपको प्रतिदिन हिंदी का समाचार पत्र पढ़ना है (कोई 2 मुख्य खबरें रोजाना लिखें)

प्रश्न6. कोई 10 सुविचार पेपर पर लिखें।

प्रश्न7. पाठ 1(राख की रस्सी) और 2 (फसलों के त्यौहार)पढ़ें और प्रश्न उत्तर अभ्यास सहित याद करें।

प्रश्न8. आपके मनपसन्द त्यौहार पर आपकी दिनचर्या क्या होती है , अपने शब्दों में लिखिए ।

प्रश्न9. कोई 10 मुहावरे अर्थ सहित लिखिए ।

प्रश्न10. घर पर पड़ी किसी बेकार वस्तु से कोई एक उपयोगी वस्तु बनाइए।

प्रश्न11. परियोजना कार्य :- पाठ 'फसलों के त्यौहार' में आए राज्यों को भारत के मानचित्र पर उनकी राजधानी सहित दर्शाइए ।

प्रश्न12. परियोजना कार्य :- अपने घर पर पड़ी हुई बेकार चीजों (जैसे मोड़े ,खाली बोतल, डिब्बे आदि) का इस्तेमाल करके कम से कम 5 खिलौने बनाइए और उनको लकड़ी की मदद से टांग दीजिये तथा उनको बनाते हुए की फोटो अवश्य संभाल कर रखें ।

1. Write the names of ten things whose smell you like and ten things whose smell you don't like.
2. Draw the picture and write the name of ten animals whose ears can be seen.
3. How many National Parks are there in India. Where are they?
4. Write the names of different types of snakes?
5. Draw a snake with the help of colourful paper
6. Collect information about Python and write ten points about it.
7. Give 5 examples to prove that animals has good sense of sight and smell.
8. Learn and write about ten women players along with the games they play.
9. Like Snake charmers which other people depend on animals for their survival. Write.
10. Make a puppet Snake .
11. Telephonically contact any snake charmer of your nearby Locality and ask about his experiences of Catching different snake and make antivenoms from it .
12. Plant any two seed in your garden and regularly water it. Check the growth of both the seeds and make a report on it.
- 13.. Fill the given Google form :

https://docs.google.com/forms/d/e/1FAIpQLScj8AyOad2L3OPOZD7SR0FsRQto8iRsOfw629wGcsiC8BeHKQ/viewform?usp=sf_link

Summer Vacation Home Assignment

Class -5 Subject - Mathematics Date- 24.04.2021

Q1) Members of Meenkar bank wants to make a factory. Over the year they saved Rs 87,000 . They have made a list

See the table for the cost of each items and the number of items they want to buy . Find the total cost (PISA)

Items	Price of each	Number of items	Cost
Bore well for fresh water	Rs 8,000	1	
Bamboo rack for fish Drying	Rs 2,000	18	
Cement Tank	Rs 1,000	3	
Tray & Knife	Rs 500	20	
Bucket	Rs 90	20	

Total =

Qa) Total cost to set up the Factory= Rs.....

(When fresh fish is dried it becomes $\frac{1}{3}$ its weight.

In one month they plan to dry 9,000 kg of Fresh fish .)

Qb) How much dried fish will they get in a month

Q2) Jhansi and her sister took a loan of Rs 32,000 to buy a log boat .They paid back a total of Rs 40,620 in one year. How much did they paid back every month

Q3) Write in Roman numerals.

Ex : 34 XXX IV

(a) 65

b)77

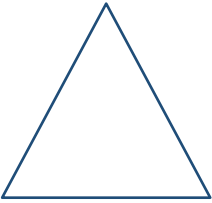


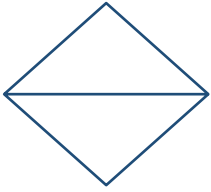

(c)100

(d) 96

(e) 45

(f) 88

Q4) Count number of angles and number of sides in the given figure.

Shapes	Number of sides	Number of Angles
		
		
		
		
		

Q5) Estimate the following (by rounding off to nearest hundreds):

Example: 5673 - 5,700 (nearest hundred)

(a) 5,841 -

(b) 2,130-

(c) 616-

(d) 979 -

(e) 459-

(f) 752 -

Q6) Choose the correct one(Multiple choice questions) (PISA)

i)Greatest 6 digit number is

a 100000

b 100001

c 999999

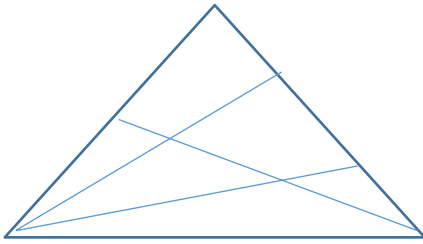
d 987654

ii) Six wolves catches six lambs in six minutes. How many wolves will be needed to catch sixty lambs in sixty minutes?

- a) 10 b) 60 c) 6 d) 12

iii) How many triangles are there in the below diagram

- a) 12 b) 15 c) 16 d) 13



iv) Find if speed = 20 km/ hours distance = 1400 km

What will be the time Hint : Time = Distance / Speed

- a) 5 hours b) 70 hours c) 80 hours d) 112 hours

v) Cost of 15 kg Apples are Rs 1200 . What will be the cost of 70kg of Apples?

- a) Rs1 400 b) Rs 6,000 c) Rs 1,000 d) Rs 5,600

vi) How many lakhs make 1 million ?

- i)1 Lakh ii)10 Lakh iii) 100 Lakh iv) 1000 Lakh

vii) Riddle - Who am I ?

My ones digit is 6 ,tens digit is 8 hundred digit is 2 and thousand digit is 9. I am the number

- a) 9286 b) 2986 c) 8629 d) 6289

Q7) Place commas correctly and write the numerals. Example: six lakh forty thousand five hundred nine Ans 6,40,509

(a) Nine crore five lakh forty-one.

Ans

(b) Seven lakh thirty four thousand five hundred forty three

Ans.....

(c) Seventy-three lakh seventy-five thousand three hundred seven.

Ans

(d) Seven crore fifty-two lakh twenty-one thousand three hundred two.

Ans

(e) Twenty-three lakh thirty thousand ten.

Ans.....

.....

***Note : Do not write direct answer
first solve than write correct answer.***

Best of luck .Enjoy your holidays with creative and innovative work

Summer Vacation Holiday Home Work

Class – V English

Q.1-Describe in your words a feast that you have attended also complete the description by keeping in mind the following points -----

- 1.Occation of the feast
- 2.Venue
3. Number of guests (Approximately)
- 4.Details of dishes and desserts served
5. Who all from your family attended the feast
6. How did you prepare what did you wear etc.
- 7.What you enjoyed the most e. g. dance, food, games, ceremony etc.

Q.2 -Write the importance of Team work OR Sports and games .

Q.3 -Arrange the following sports and games in alphabetical order

(Cricket ,Swimming ,Judo, Football, Boxing ,Relay race ,Athletics ,Sailing ,Base ball ,Tennis, Hockey, Volleyball, Wrestling ,Kabaddi ,Hand ball , Kho-kho.)

Q.4- Find out all difficult words from next 3 chapters of English book .

Q.4 -Make a pocket dictionary(English and hindi)

Project -Make a short report on Virtual(online) Classes running in your School.

OR

Types of Noun definitions and examples ,pictures and drawings to be used .

(regular reading and writing practice)